

ATOMIC ENERGY CENTRAL SCHOOL – MANUGURU

CT4 TERM-1 SUBJECT: ENGLISH WORKSHEET 2019-20

Name: _____ Roll No : _____ Time: 2 hours Date: _____

Class 1 /Sec _____ Invigilator's sign _____ Examiner's sign _____

1. Write the rhyming words.

cake blue

fine hop

2. Write the opposites

beautiful X Always X

come X up X

3. Write the missing letters.

bu _____ le la _____ u

ha _____ y chi _____ i

4. Write the plurals

flower crow

tree mango

5. Circle the odd one out

crow cat dog cow

rose lily lotus parrot

red bus blue green

sun moon trees stars

6. Fill in the gaps

Red	Parrot	wolf	pigs
-----	--------	------	------

1. The little child's house is.....

2. The.....was bad.

3. Mittu was a.....

4. Sonu, Monu and Gonu are three

little.....

7. How do you feel? - Happy 😊 Sad 😞 Draw and write.


When you get a nice dress

When you get hurt

8. Circle the things that float.



Leaf




straw



stone



marble



Key



ball



feather



spoon

9. Match the words with the pictures.

A

Needle

Bread

Shoes

Bat

B

jam

thread

ball

socks

10. Answer the following questions.

1. Name the chicks in the story?

.....

Who said, 'caw, caw, go away?'

.....

What did Mohini draw?.

.....

What did the little boy see?

.....

11. Put full stop and capital letters.

1. i am a good child

.....

2. mittu is a green parrot

.....

12. Correct the mistakes

1. Lalu ate a green chilli.

.....

2. The shoe burst in the water.


.....

13. Choose the correct answer.

1. Sonu lived in the house of.....(bricks / straw)

2. Mittu saw amango on the tree.(yellow / red)

14. Draw a house and color it.



15. Handwriting

I like eating apples and mangoes.

.....

.....

.....

.....

.....

ATOMIC ENERGY CENTRAL SCHOOL – MANUGURU

CT4 TERM-1 SUBJECT: EVS WORKSHEET 2019-20

Name: _____ Roll No : _____ Time: 2 hours Date: _____

Class 1 /Sec _____ Invigilator's sign _____ Examiner's sign _____

I. Fill in the blanks with the words given in the box.

Skin	eyes	wind	milk	sharp	silkworm
Zebra crossing	soap	healthy	kitchen	water	

1. We should not play with _____ objects.
2. Our _____ help us to feel.
3. Always cross the road at the _____.
4. We cook our food in the _____.
5. Eat _____ food.
6. Moving air is called _____.
7. We see with the help of our _____.
8. _____ is a complete food.
9. We get silk from _____.
10. We should take bath with _____ and _____.

II. Give one example of each.

- 1) A milk product eaten during lunch or dinner. _____
- 2) A thing that you smell. _____
- 3) A thing that you use in rainy season. _____
- 4) A thing which needs air to breathe. _____
- 5) A thing used to keep your body clean. _____
- 6) A thing you do with your hands. _____
- 7) A vegetable which is purple in colour. _____
- 8) A thing you do with your legs. _____
- 9) A person who wears a uniform. _____
- 10) A thing in which you fill air. _____

III. Match the body parts with the right object.

- | | |
|----------|-------------|
| 1. hair | nailcutter. |
| 2. teeth | comb. |
| 3. nail | earbuds. |
| 4. ear | toothbrush. |

IV. Write Yes or No.


- 1) We wear cotton clothes in winter. _____
- 2) Air is all around us. _____
- 3) Junk food keeps us healthy and fit. _____
- 4) Keep the nails long and dirty. _____

5) Our body has many parts. _____

6) Drink 5 glasses of water every day. _____

7) A kutcha house is made of straw , mud and bamboo. _____

V. Name the following houses.

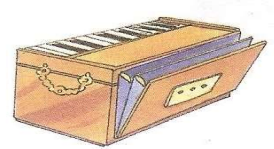







VI. Write four sentences about yourself.

VII. Look at the pictures and write whether you smell, taste, see or hear the following things.



VIII. Draw and colour the following.

a) any two parts of your body.



b) The traffic light showing the three colours.



ATOMIC ENERGY CENTRAL SCHOOL – MANUGURU

CT4 TERM-1 SUBJECT: HINDI WORKSHEET 2019-20Name: _____ Roll No : _____ Time: 2 hours Date: _____

Class 1 /Sec _____ Invigilator's sign _____ Examiner's sign _____

प्रश्न-1- नीचे लिखे वर्णमाला को पूरी करो ।

अ ----- इ ई ----- ऊ

ए ऐ ओ ----- अं अः

क ----- ग घ ङ

च छ ----- झ ञ

ट ----- ड ढ ण

त थ द ध -----

----- फ ब भ म

य र ----- व श

ष ----- ह क्ष ञ ।

प्रश्न-2- दिए गए उदाहरण के अनुसार बारहखड़ी पूरी करो ।

उदा: क का कि की कु कू के कै को कौ कं कः
ख ---- खि खी खु खू खे खै खो खौ खं खः
ज जा जि ---- जु जू जे जै जो ---- जं जः
ट टा ---- टी टु टू टे टै ---- टौ टं टः
त ता ति ती ---- तू ते तै तो तौ तं तः
ब ---- बि बी बु बू ---- बै बो बौ बं बः

प्रश्न-3- आ (ा) की मात्रा से दो शब्द लिखो । जैसे - कार

प्रश्न-4- ई (ी) की मात्रा से दो शब्द लिखो । जैसे - गीत

प्रश्न-5- ऊ (ू) की मात्रा से दो शब्द लिखो । जैसे - मूल

प्रश्न-6- तुम्हारा नाम क्या है ? लिखो ।

प्रश्न-7- नीचे लिखे गए शब्दों को चित्रों से मिलाओ ।



पटरी



गठरी



झंडा



पेड़

प्रश्न-8- ज़मीन के नीचे उगने वाली चार चीज़ों के नाम लिखो।

प्रश्न-9- किसके कितने पहिए ? लिखो ।

कार - ----- साइकिल - -----

बस - ----- स्कूटर - -----

हवाई जहाज़ - ----- ठेला - -----

प्रश्न- 10- दादी के घर तुम कैसे जाते हो ? -----

प्रश्न-11- तुम इनमें से किसकी सवारी की है ? सही जगह पर सही (√) या गलत (×) का निशान लगाओ।

सवारी	-	मैंने सवारी की है	मैंने सवारी नहीं की है
बस	-	-----	-----
रिक्शा	-	-----	-----
रेलगाड़ी	-	-----	-----

प्रश्न-12- पूरी करो ।

सुनो गार्ड ने दे दी सीटी -----।

प्रश्न-13- सही (√) और गलत (×) का निशान लगाओ।

सवारी		टिकट लगेगा	पैसा लगेगा	मुफ्त
बस	-	-----	-----	-----
रिक्शा	-	-----	-----	-----
गोदी	-	-----	-----	-----
रेलगाड़ी	-	-----	-----	-----

प्रश्न-14- क्या भाता है ? क्या नहीं भाता है ? सही जगह पर सही

(✓) और गलत (×) के निशान लगाओ।

चीजें	मज़े से खाएँगे	खाना पड़ेगा	बिल्कुल नहीं खाएँगे
आम	-----	-----	-----
बैंगन	-----	-----	-----
करेला	-----	-----	-----
जलेबी	-----	-----	-----

प्रश्न-15- ज़मीन के ऊपर उगने वाली चार चीज़ों के नाम लिखो।

प्रश्न-16- खाली जगह को पूरी करो ।

मैं चाकू हूँ ।

मैं सब्ज़ी -----हूँ।

मैं ----- हूँ ।

मुझमें ----- खाओ।

प्रश्न-17-किससे क्या काटोगे ?

कपड़ा सेब बैंगन कागज़

कैंची से चाकू से

प्रश्न-18- दिए गए उदाहरण के अनुसार समान तुक वाले शब्द लिखो।

उदाहरण - मरोड़ो - सिकोड़ो

उतरो - -----

पतीले - -----

मटका - -----

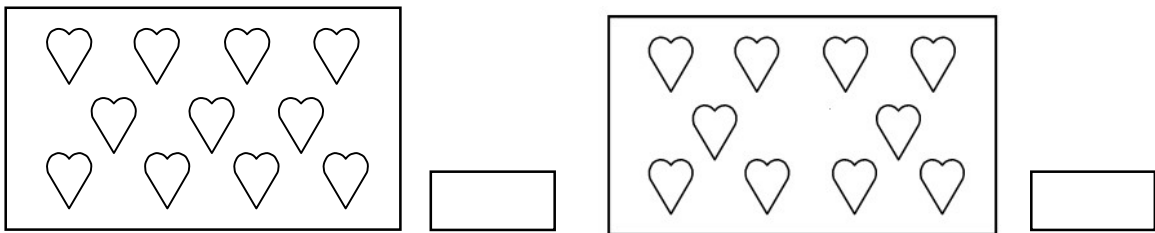
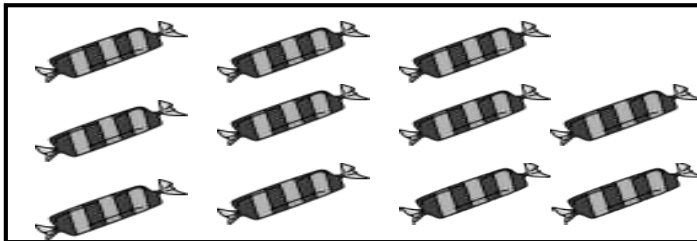


सोई - -----



ATOMIC ENERGY CENTRAL SCHOOL – MANUGURU

CT4 TERM-1 SUBJECT: MATHEMATICS WORKSHEET 2019-20Name: _____ Roll No : _____ Time: 2 hours Date: _____

Class 1 /Sec _____ Invigilator's sign _____ Examiner's sign _____

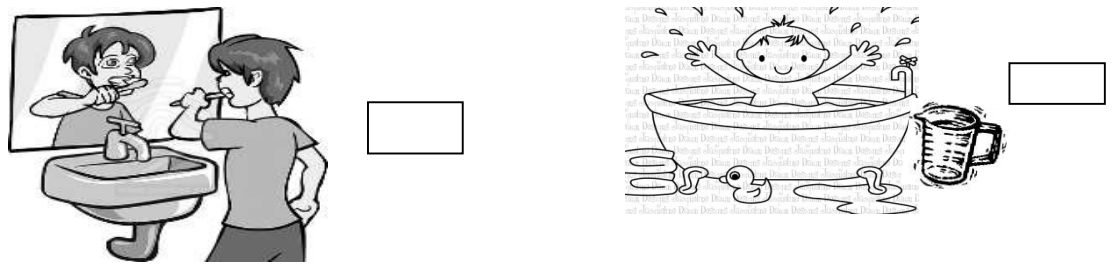
I. Do as directed.

1. Tick the group that has **more** objects.2. Make a **group of 10** chocolates by circling3. How many **altogether**?4. How many are **left**?


5.  —  =

II. Observe the picture and tick.


1. Tick the activity that takes **longer** time to do.



2. Tick the activity that you do in the **morning**.



3. Tick the activity that you do in the **night** time.



III. Do as directed.

20m

1. Write in **words**.

a. 13: _____

b. 8: _____

2. Write in **figures**.

a. fourteen = _____

b. twenty = _____

3. Observe and write the numbers that come **before/ after/ between**.

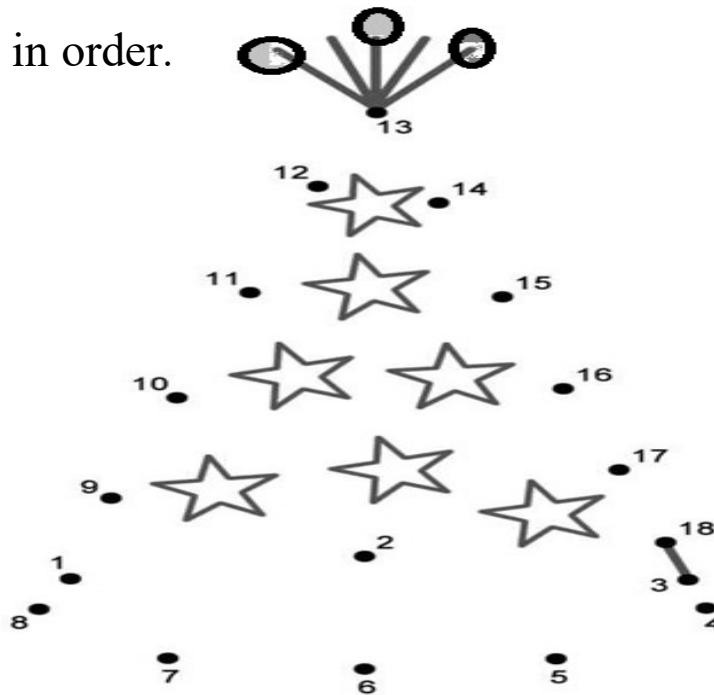
a. _____, 19, _____

b. 13, _____, _____, 16

4. Write the **missing** numbers.

		12			15			19	
--	--	----	--	--	----	--	--	----	--

5. **Join** the dots in order.

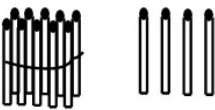


6. Circle the -

a. **biggest** number : 9 14 11

b. **smallest** number : 13 19 16

7. **How many sticks?**

a.  =

b.  =

8. **Draw** 17 match sticks as bundle of 10 and the remaining loose in the given box.



9. Write the **number**.

a. 1 ten and 3 ones = _____

b. 1 tens and 9 ones = _____

10. How many **tens**? How many **ones**?

a. 11 = _____ ten + _____ ones.

b. 18 = _____ ten + _____ ones

IV. **Add :**

a. $7 + 9 =$

b. $13 + 6 =$

c.
$$\begin{array}{r} 12 \\ + 5 \\ \hline \hline \end{array}$$

d.
$$\begin{array}{r} 7 \\ + 6 \\ \hline \hline \end{array}$$

V. Subtract:

a. $8 - 3 = \square$

c.
$$\begin{array}{r} 19 \\ - 4 \\ \hline \hline \end{array}$$

d.
$$\begin{array}{r} 7 \\ - 5 \\ \hline \hline \end{array}$$

b. $17 - 5 = \square$

VI. Do the following.

1. There are 7 boys and 8 girls in Sarabhai house in 2A .
How many children are there **altogether**?

2 . Rahul has 9 balloons. He gave 3 balloons to his friends.
How many balloons are **left** with him?

ATOMIC ENERGY CENTRAL SCHOOL – MANUGURU

CT4 TERM-1 SUBJECT: TELUGU WORKSHEET 2019-20Name: _____ Roll No : _____ Time: 2 hours Date: _____

Class 1 /Sec _____ Invigilator's sign _____ Examiner's sign _____

I. అచ్చులు రాయండి –

అ _____

_____ అ:

II. హల్లులు రాయండి -

క _____

చ _____

ట _____

_____ న

య _____ క్ష _____ ణ

III. క్రింది హల్లులకు గుణింతాలు రాయండి –

1. క _____

_____ క:

2. డ _____

_____ డ:

3. వ : _____

_____ వః

4. న : _____

_____ నః

IV. హల్లులకు ఒత్తులు రాయండి – 4 మార్కులు

క _____ గ _____ ఛ _____ ఝ _____ ఠ _____ డ _____

త _____ న _____ ప _____ భ _____ మ _____ య _____

V. క్రింది గళ్ళలోని పదాలతో అక్షరాలు రాయండి -

ఉదా :- వల

ప	డ	ల	క
క	ల	త	ట
జ	ర	బ	ఆ

1. _____ 2. _____ 3. _____ 4. _____

VI. క్రింది పదాలను గీతల్లో అందంగా రాయండి –

అరక

అట

ఇటుక

ఉడుత

ఊయల

VII. క్రింది అక్షరాలు కలిపి రాయండి

ఇ

- టుక _____
- నుము _____
- రుసు _____
- రుకు _____

VIII. క్రింది పదాలకు టం చేర్చి రాయండి

ఉదా :- ఊగ __ ఊగటం

- | | |
|--------------|---------------|
| 1. ఆడ _____ | 4. కడగ _____ |
| 2. నడవ _____ | 5. రాయడ _____ |
| 3. కలప _____ | 6. చూడ _____ |

XI. క్రింది పదాలలో వేరుగా ఉన్న పదాన్ని రాయండి

- | | |
|-------------------------------|-------|
| 1. అలక, అనప, అలక, అలక | _____ |
| 2. పంజరం, పంకజం, పంకజం, పంకజం | _____ |
| 3. జలం, జపం, జలం, జలం | _____ |
| 4. ఉరగం, ఉరగం, ఉరగం, ఉంగరం | _____ |

X. క్రింది వాక్యాలలో దండ పదాన్ని గుర్తించి సున్నా (0) చుట్టండి

1. పాప పూలను దండ గుచ్చింది.
2. పాప గుడికి దండ తెచ్చింది.

XI. క్రింది ఖాళీలను సరైన అక్షరాలచే పూరించండి

ఉదా :- ఎలుక _ (లు, క)

1. క _____ వ (వ, డ)
2. ఊ _____ ల (య, క)
3. కం _____ ర (ప, జ)
4. చిలు _____ (క, ట)
